


Name \_\_\_\_\_


## Hive Jive 1

Write the numbers 1-9 in the hexagons to correctly complete the equations.  
Use each number once.

Three numbers have been put in for you as a hint.



$$\begin{array}{ccccccc}
 8 & + & \square & - & \square & = & 15 \\
 + & & - & & + & & \\
 \square & - & 1 & + & \square & = & 6 \\
 - & & + & & - & & \\
 \square & + & \square & - & 5 & = & 8 \\
 = & & = & & = & & \\
 4 & & 14 & & 1 & & 
 \end{array}$$



$$\begin{array}{ccccccc}
 \square & - & \square & + & 8 & = & 12 \\
 - & & + & & - & & \\
 \square & + & 9 & - & \square & = & 5 \\
 + & & - & & + & & \\
 5 & - & \square & + & \square & = & 8 \\
 = & & = & & = & & \\
 8 & & 10 & & 5 & & 
 \end{array}$$

1  
 2      3  
 4      5      6  
 7      8  
 9


Try cutting the numbers out  
and moving them around!

Name \_\_\_\_\_

## Hive Jive 2

Write the numbers 1-9 in the hexagons to correctly complete the equations.  
Use each number once.

Three numbers have been put in for you as a hint.



$\square - \square + 9 = 14$   
 $\square + 7 - \square = 2$   
 $4 - \square + \square = 7$   
 $\square = 7$     $\square = 6$     $\square = 6$

$4 + \square - \square = 2$   
 $\square - 5 + \square = 5$   
 $\square + \square - 3 = 6$   
 $\square = 11$     $\square = 8$     $\square = 6$

**1**  
**2**   **3**  
**4**   **5**   **6**  
**7**   **8**  
**9**


Try cutting the numbers out  
and moving them around!

Name \_\_\_\_\_

## Hive Jive 3


Write the numbers 1-9 in the hexagons to correctly complete the equations.  
Use each number once.

One or two numbers have been put in for you as a hint.



$$\begin{array}{ccccccc}
 8 & + & \square & - & \square & = & 2 \\
 - & & + & & - & & \\
 \square & - & \square & + & \square & = & 7 \\
 + & & - & & + & & \\
 \square & + & \square & - & 1 & = & 8 \\
 = & & = & & = & & \\
 4 & & 0 & & 5 & & 
 \end{array}$$

$$\begin{array}{ccccccc}
 \square & - & \square & + & \square & = & 4 \\
 + & & - & & + & & \\
 \square & + & 1 & - & \square & = & 3 \\
 - & & + & & - & & \\
 \square & - & \square & + & \square & = & 6 \\
 = & & = & & = & & \\
 7 & & 8 & & 6 & & 
 \end{array}$$






1  
 2      3  
 4      5      6  
 7      8  
 9

Name \_\_\_\_\_


## Hive Jive 4

Write the numbers 1-9 in the hexagons to correctly complete the equations.  
Use each number once.



$$\begin{array}{rclcl}
 \square & - & \square & + & \square & = & 12 \\
 - & & + & & - & & \\
 \square & + & \square & - & \square & = & 6 \\
 + & & - & & + & & \\
 \square & - & \square & + & \square & = & 3 \\
 = & & = & & = & & \\
 8 & & 3 & & 6 & & 
 \end{array}$$

$$\begin{array}{rclcl}
 \square & + & \square & - & \square & = & 1 \\
 + & & - & & + & & \\
 \square & - & \square & + & \square & = & 14 \\
 - & & + & & - & & \\
 \square & + & \square & - & \square & = & 8 \\
 = & & = & & = & & \\
 9 & & 10 & & 10 & & 
 \end{array}$$



1  
 2      3  
 4      5      6  
 7      8  
 9